

Şekil Sayı Eşleştirme

→
= 6

○
= 8

□
= 1

△
= 5

⬠
= 4

▽
= 7

☆
= 9

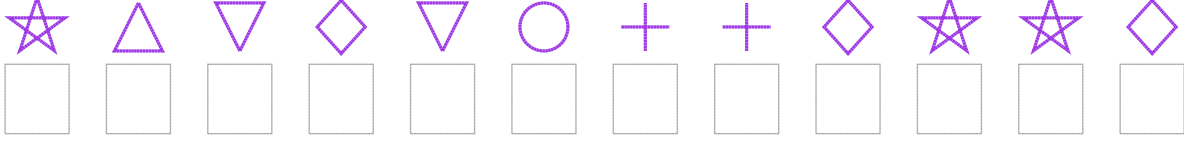
+

×

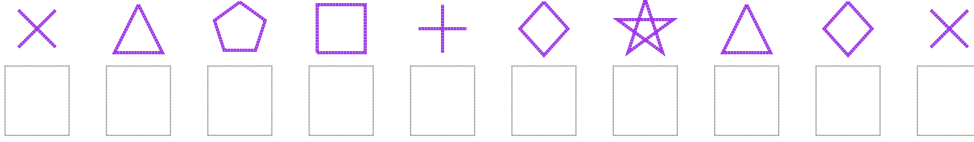
◇
= 3

Aşağıdaki uzun şifreleri hatasız çözerek altlarına yazın:

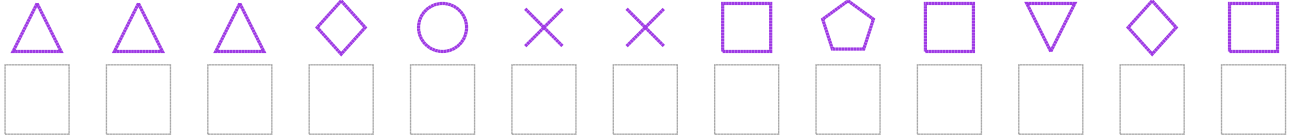
1. Şifre



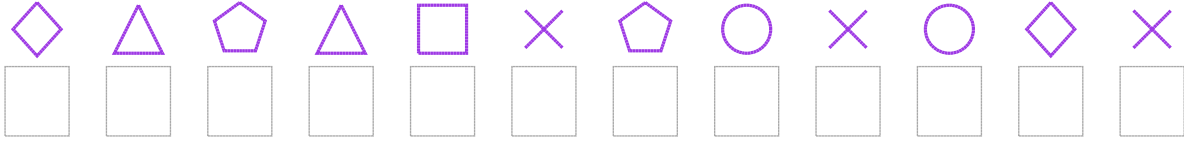
2. Şifre



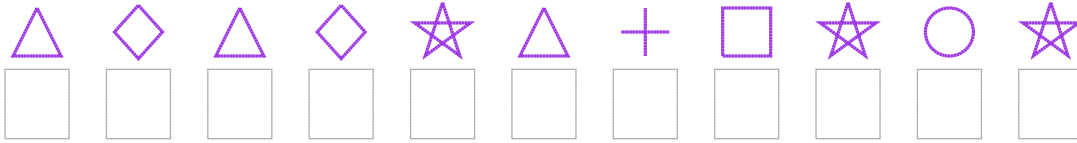
3. Şifre



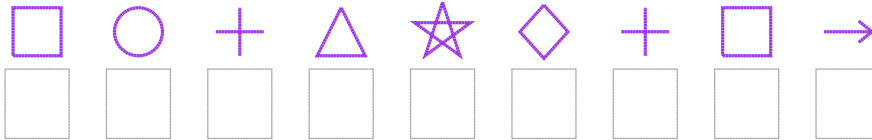
4. Şifre



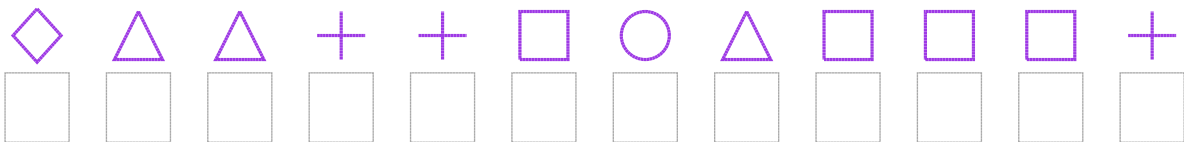
5. Şifre



6. Şifre



7. Şifre



□ BONUS: 7. ve 3. şifrenin üçüncü rakamının toplamı kaçtır?

Cevap Anahtarı

1. Şifre: 957378223993

2. Şifre: 0541239530

3. Şifre: 5553800141731

4. Şifre: 354510480830

5. Şifre: 53539521989

6. Şifre: 182593216

7. Şifre: 355221851112

□ Bonus Soru Cevabı: 10